





UNITS

KS1 – 2022 Paper – Reasoning

1.

15 Draw a line to match each measurement to the correct unit.

One is done for you.

measurement	unit
 the length of a pencil	kg
 the mass of a bag of potatoes	°C
 the capacity of a cup	cm
 the temperature outside	ml



1 mark